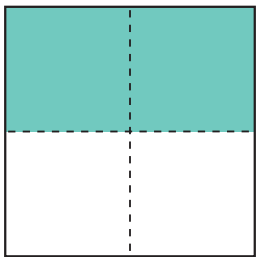
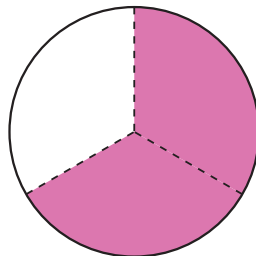


Fun Fractions

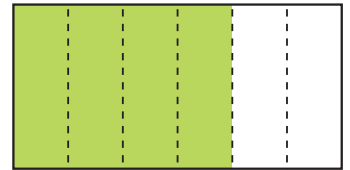
What fraction of the shape has been colored?
Write the fraction under the shape.



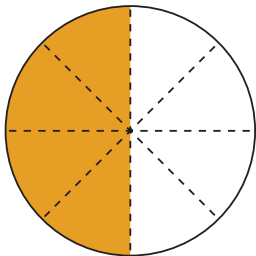
$$\frac{2}{4}$$



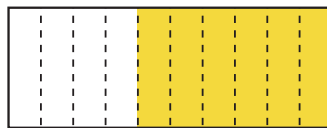
$$\frac{2}{3}$$



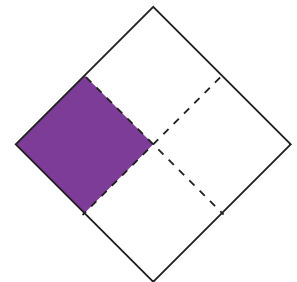
$$\frac{4}{6}$$



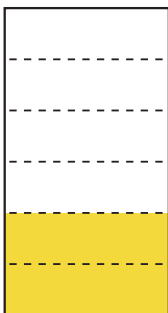
$$\frac{4}{8}$$



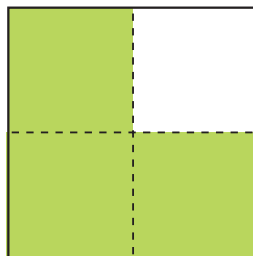
$$\frac{6}{10}$$



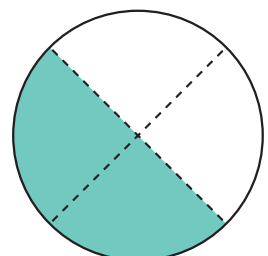
$$\frac{1}{4}$$



$$\frac{2}{6}$$



$$\frac{3}{4}$$



$$\frac{2}{4}$$