


What Time Is It?


Match the clock to the time.



11:55



9:50




2:05



6:50



7:25



12:35